



**MPVM:GANGA GURUKULAM
HOLIDAY HOMEWORK**



Class - 2

List of subjects:

- ❖ *English*
- ❖ *Hindi*
- ❖ *Mathematics*
- ❖ *EVS*
- ❖ *Computer*



MPVM:GANGA GURUKULAM

.....
Gaddopur, Phaphamau, Prayagaraj

WEBSITE – www.mpvmgg.com

English

Q1. Choose the describing words.

1. A dog was chewing on a tasty bone.



2. I enjoy sleeping on my comfortable bed.



3. I saw a big and red airplane flying in the sky.




4. I love my soft and blue pillow.



5. India Gate is a beautiful monument.



Q2.  Fill in the blanks with a or an.

A & AN



- I bought _____ orange bag for my little brother.
- Coco is _____ lazy dog.
- I am thirsty. Please give me _____ glass of water.
- She can ride _____ bike.
- Vini was dressed as _____ elf yesterday.
- Everyday I eat _____ egg in breakfast.
- _____ tooth fairy came & took away my broken tooth.
- There is _____ insect under the table.
- Rimu was happy to get _____ gift from her parents.
- _____ snail is faster than _____ caterpillar.

DID YOU ENJOY IT!



Q3.




PREPOSITION OF PLACE

Look and complete the preposition of place

1. The cat is the box.



2. The bird is the boxes.



3. The cat is the box.



4. The bird is the box.



5. The cat is the box.



6. The cat is the box.



BETWEEN

BEHIND

ON

UNDER

IN FRONT OF

IN

Q4. Look and choose the correct word:-

He/She is kicking the ball.



This is my/their hat.



It/They are dancing.



You/It is a blue bag.



He/She is standing up.



Q5. Look at the picture given below and write few lines about it

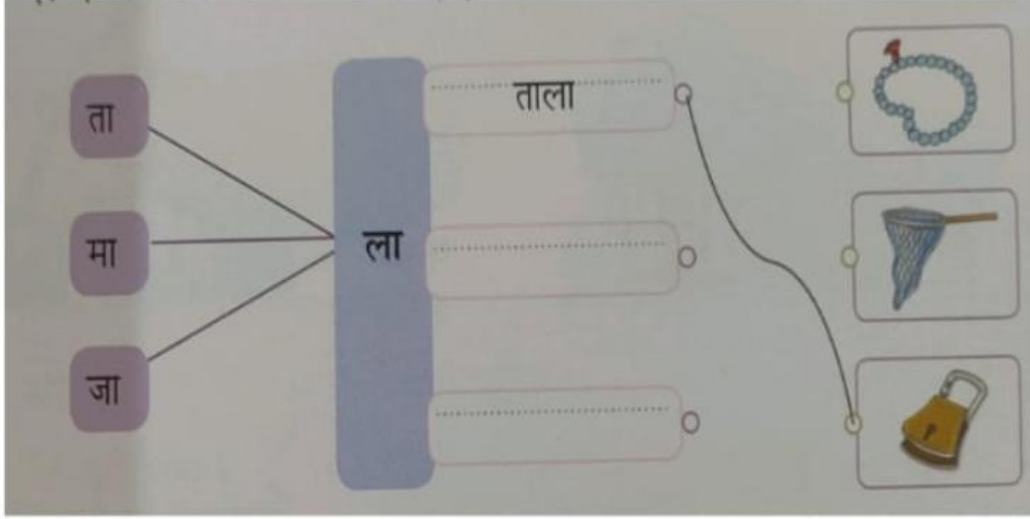


Q6. Eng. Lit. – Complete the “Get Ready” portion in your Eng. Lit. book. Learn the Poem- “What is Pink?”

Q7. How did you spent your Summer Holidays? Explain in a paragraph. 🌞 🏖️ 🏡

Hindi

प्रश्न १- शब्द बनाकर चित्रों से मिलाओ -



प्रश्न २- शब्दों को छाँटकर सही जगह पर लिखो -

भाई , मुरगा , मोरनी , मोर , मुरगी , साँप , बहन , साँपिन


पुल्लिंग -

स्त्रीलिंग -

प्रश्न ३- वर्ग पहेली से पाँच सहायकों के नाम ढूँढकर लिखो -

ना	ई	ड	डा	प
डॉ	मो	लि	कि	न
व	ची	म	या	बा
ट	कि	सा	न	व
र	ख	ता	द	र्जी

.....



प्रश्न ४- नीचे दिए गए शब्दों के बहुवचन लिखो -

साइकिल - _____

पुस्तक - _____

सिक्का - _____

फ़िल्म - _____

पौधा - _____

डिब्बा - _____

प्रश्न ५- दिए गए चित्र को देखकर इन प्रश्नों के उत्तर दो -



(क) यह किस जगह का दृश्य है

उत्तर . _____

(ख) बतख किसमें तैर रही हैं ?

उत्तर. _____

(ग) मधुमक्खियाँ किस पर बैठी हैं ?

उत्तर . _____

(घ) इनके दो - दो पर्यायवाची लिखो -

हवा - _____


जल - _____

* सवेरा(कविता) याद करो।

* हिन्दी साहित्य (मधुप) पुस्तक के पेज नं0 13, 14, 22, 24 पर दिया गया कार्य पूर्ण करो।

* पुस्तक तथा अभ्यास पुस्तिका में कराया गया सब कार्य ध्यान से याद करो।

* होली के विषय पर 5 या 7 लाइन लिखो ।



Maths

Q1. Solve L-1 in your Maths book itself. Also revise all the work done in Maths book and notebook.

Q2. Complete the equation by drawing the missing dots.

$$\begin{array}{|c|} \hline \bullet \\ \bullet \\ \hline \end{array} + \square = 12 \quad \begin{array}{|c|} \hline \bullet \bullet \\ \bullet \bullet \\ \hline \end{array} + \square = 7$$



$$\square + \begin{array}{|c|} \hline \bullet \bullet \\ \bullet \\ \hline \end{array} = 9 \quad \square + \begin{array}{|c|} \hline \bullet \bullet \bullet \\ \bullet \bullet \bullet \\ \hline \end{array} = 10$$

$$\begin{array}{|c|} \hline \bullet \\ \hline \end{array} + \square = 9 \quad \begin{array}{|c|} \hline \bullet \bullet \\ \bullet \\ \hline \end{array} + \square = 5$$







$$\square + \begin{array}{|c|} \hline \bullet \\ \bullet \\ \hline \end{array} = 5 \quad \square + \begin{array}{|c|} \hline \bullet \bullet \bullet \\ \bullet \bullet \\ \hline \end{array} = 11$$


$$\begin{array}{|c|} \hline \bullet \\ \hline \end{array} + \square = 5 \quad \begin{array}{|c|} \hline \bullet \bullet \\ \bullet \bullet \\ \hline \end{array} + \square = 7$$

Q4. Mental Maths

1	What is $8 + 1$?	
2	Write the next number 1, 2, 3, 4, 5, 6, ____	
3	Write One Hundred and Twenty in numbers.	
4	Which number is a multiple of 2 ? 17 7 9 4 23	
5	Draw the next shape in the sequence. 	
6	Which number comes after 5 ?	
7	What is $10 - 4$?	
8	How many Circles are there? 	
9	What number is one half of 8 ?	
10	What is $10 + 4$?	

Q3. The pictogram below shows the number of cars Mr. James repaired last week.

Day	Number of cars repaired
Monday	
Tuesday	
Wednesday	
Thursday	
Friday	
Saturday	
Sunday	

Key:  represents 6 cars

Answer the following questions.

- How many cars did Mr. James repair on Monday? _____
- On which day the maximum number of cars were repaired?

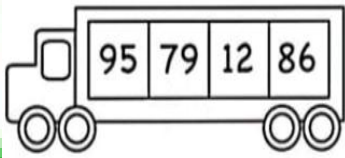
- Did he repair 30 cars on Wednesday? _____
- On which day Mr. James didn't do any work? _____
- How many cars did he repair on Friday and Saturday? _____
- How much more cars did he repair on Thursday than Wednesday?

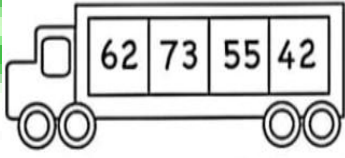
Q5. Write down how many tens and ones are in each number:

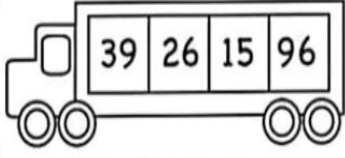
45	___ tens ___ ones	34	___ tens ___ ones
52	___ tens ___ ones	46	___ tens ___ ones
25	___ tens ___ ones	68	___ tens ___ ones
35	___ tens ___ ones	90	___ tens ___ ones
45	___ tens ___ ones	51	___ tens ___ ones
68	___ tens ___ ones	62	___ tens ___ ones

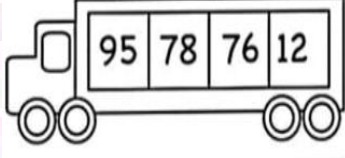
Q6.

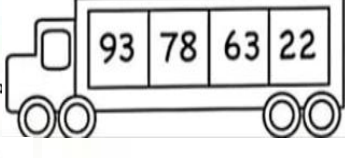
Write the numbers in order from least to greatest.











Q7.

Match the shapes to their correct name:



Cone



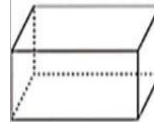
Sphere



Cube



Cylinder



Rectangular prism

KIDPID.COM

Q8.

Multiplication

$6 \times 9 =$	$7 \times 1 =$	$3 \times 6 =$	$4 \times 1 =$
$5 \times 6 =$	$10 \times 9 =$	$8 \times 5 =$	$2 \times 6 =$
$6 \times 3 =$	$3 \times 8 =$	$7 \times 2 =$	$6 \times 2 =$
$6 \times 6 =$	$10 \times 8 =$	$8 \times 8 =$	$4 \times 3 =$

Q9.

Word Problem

There are 4 sparrows and 5 crows on a tree. There are ___ birds on the tree in all.	T O
A man has 9 eggs. 5 fell down and broke. ___ eggs are left.	T O
I had 8 balloons. 2 flew away ___ balloons are left with me.	T O

EVS

A. Write down the following.

1. The name of my school is _____.
2. _____ is the principal of my school.
3. My class teacher's name is _____.
4. My favourite subject is _____.

B. Solve the riddles to find the word in the grid.

1. These clothes keep you cool on a hot day.
2. Another name for rainy season.
3. I shine brightly on a hot day.
4. You wear these on a rainy day.
5. You can see lots of these on a cloudy day.


R	C	L	O	U	D	S	A
B	L	A	N	K	E	T	B
F	C	O	T	T	O	N	K
M	O	N	S	O	O	N	L
G	U	M	B	O	O	T	S
S	U	N	K	R	F	P	Q

6. You all use me on winter season.

C. Tick the odd one out.

- | | | | |
|------------|-------------|---------|----------------|
| 1. Teacher | Books | Bed | Bag |
| 2. Train | Fire engine | Fireman | Fire hose pipe |
| 3. Doctor | Flowers | Nurse | Medicines |
| 4. Swings | Spoon | Bench | Trees |

D. Draw/Paste pictures of few things that we get from plants.



E. Draw picture of your favourite festival. Write 2-3 lines about it.

F. Make a list of the vehicles, five of your friends use to go to school. Also draw and colour the

vehicle which you use to go to school.

G. Complete L1 in your EVS book itself. Also revise all the work done in EVS book and notebook.

Computer

A. Underline the correct answer :☑

1. A computer is an electronic/mechanical machine.
2. Computer runs on fuel/electricity.
3. Computer can store small/more information.
4. Humans get active/tired after working long hours.
5. Computer never/always gives wrong result.
6. Computer needs instruction/food from humans.
7. Tablets look like a TV/slate.
8. Palmtops/desktops are small computers.
9. Desktop/laptop can be easily carried from one place to another.
10. Humans forget something/everything.

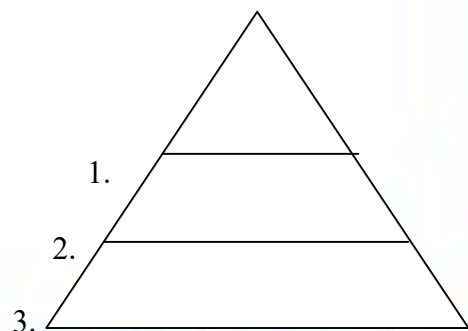
B. Complete the following words :

1. D _ _ K T _ P
2. _ _ L M _ O P
3. L _ P _ _ P
4. T _ _ L _ T

C. Arrange the given steps in the correct order in the given pyramid.

1. To switch on the computer.

- Switch on the CPU.
- Switch on the UPS.
- Switch on the monitor.



D.

Match the images with the word:

1. Keyboard

2. Printer

3. Monitor

4. Webcam

5. Joystick

6. Microphone

7. Mouse

8. CPU

9. Speaker



E.

Label all the parts of the computer :





HAPPY
SUMMER
HOLIDAYS

